

Adabistan-e-Soophia

General Certificate of Education Ordinary Level 3(**Test 1**)

Adabistan-e-Soophia
School for Boys & Girls

CANDIDATE
NAME

--

CENTER NUMBER							CANDIDATE NUMBER							
------------------	--	--	--	--	--	--	---------------------	--	--	--	--	--	--	--

PAKISTAN STUDIES

Paper II

2059/02

Environment of Pakistan

Session

2	0	2	0	-	2	1
---	---	---	---	---	---	---

Time

9	0	m	i	n	u	t	e	s
---	---	---	---	---	---	---	---	---

Marks

7	5
---	---

Additional Materials: *Answer Booklet/Paper*

If you have been given an Answer Booklet, follow the instructions on the front cover of the Booklet. Write your Centre number, candidate number and name on all the work you hand in.

Write in dark blue or black pen.

You may use a soft pencil for any diagrams or rough working.

Do not use staples, paper clips, highlighters, glue or correction fluid.

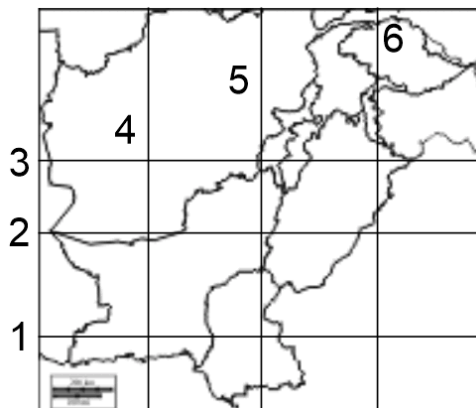
Answer all questions.

At the end of the examination, fasten all your work securely together.

The number of marks is given in brackets [] at the end of each question or part question.

Turn over

1. (a) Study Fig. 1.1, an outline map of Pakistan.



Label the line of latitude 1,2,3 and longitude 4,5,6. [3]

(b) (i) Describe the Natural topographical features of Potwar Plateau.

.....

.....

.....

.....

.....

.....

..... [3]

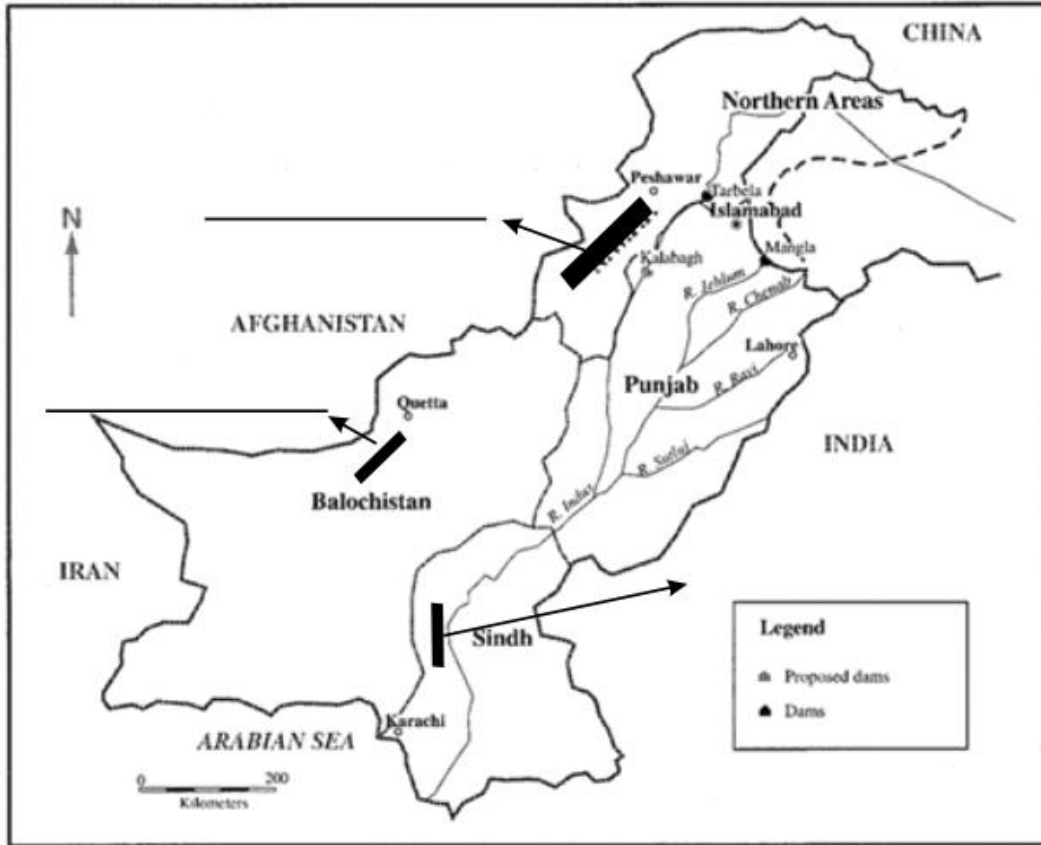
(ii) State two ways that land on potwar plateau is used.

1 2 [2]

(iii) Label the location of the following western mountains on the map given below.

[3]

- Waziristan hill
- Kirthar ranges
- Central Brahui ranges



(c) (i) Complete the passage below about location of Pakistan. Choose the correct words from the list and place them in the spaces provided. [3]

Pakistan's border with Afghanistan is known as _____. The _____ strip separates Pakistan from Tajikistan. Pakistan shares the longest border with _____. In south west Pakistan shares border with _____. In _____ Arabian sea is Present Jinnah airport is present in _____

Karachi, Wakhan, India, Iran, south Afghanistan, East, Durrand North, China

(ii) Describe the characteristics of upper Indus Plain.

.....
.....
.....
.....
.....
.....
..... [3]

(iii) Explain economic importance of Flood plains

.....
.....
.....
.....
..... [2]

Evaluate the possibility and success of developmental projects in rugged landscape. Explain with the help of Examples.

.....
.....
.....
.....
.....
.....
.....
.....
.....
.....
.....

.....

.....

.....

.....

.....

.....

.....

.....

.....

.....

.....

..... [6]

2(a) Describe the natural topographical features shown in the following photographs A and B.



Photograph A



Photograph B

.....
.....
.....
.....
.....
.....
..... [3]

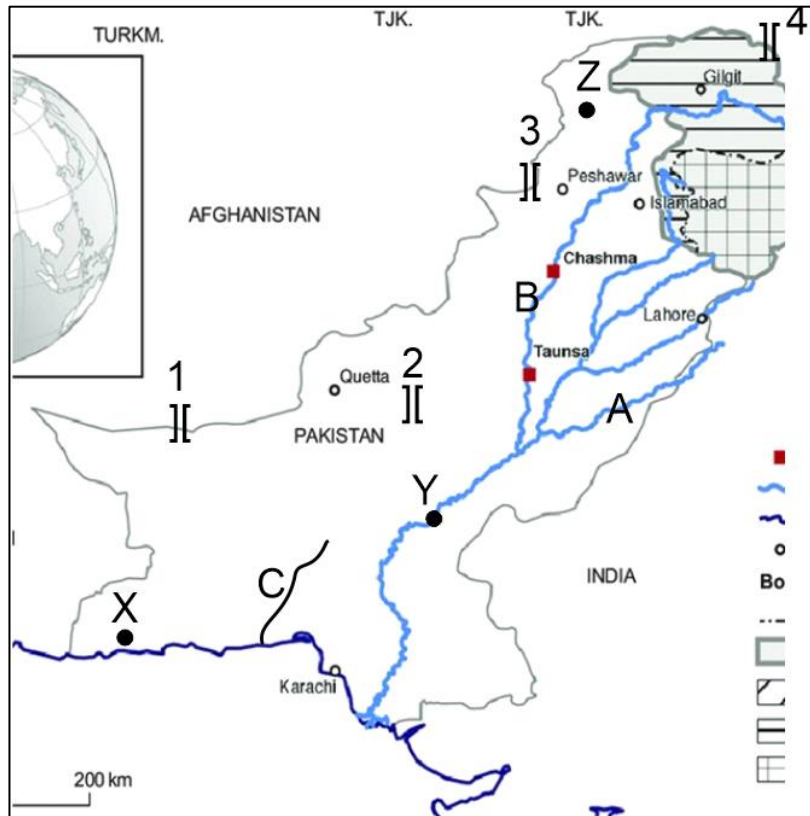
(ii) Using the information shown in the following photograph and your own knowledge explain the problem faced by people living in Northern mountains area.



.....
.....
.....
.....
..... [3]

iii) Label the following features on the map.

[5]



- River A, B and C A _____, B _____, C _____
- City X, Y and Z X _____, Y _____, Z _____
- Pass 1,2,3,4 1 _____, 2 _____, 3 _____, 4 _____

iv) Explain the importance of any two of the passes marked (1----4) above.

.....

.....

.....

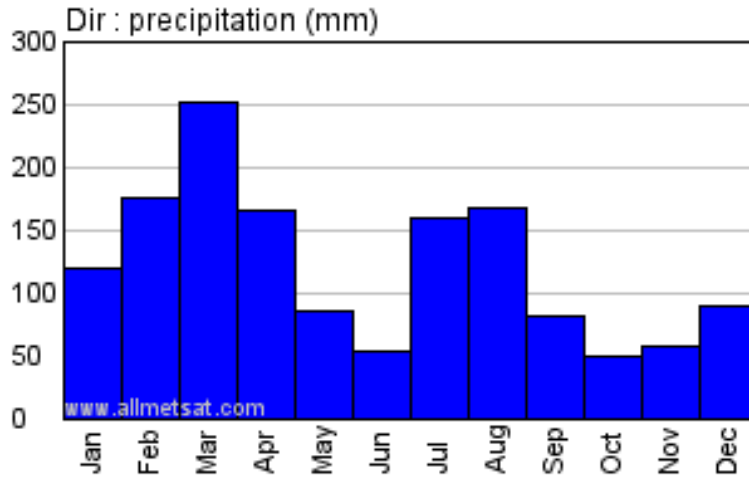
.....

.....

.....

..... [3]

(b) Study Fig. a graph showing rainfall in Dir, Khyber Pakhtunkhwa.



(i) What is the maximum rainfall, and when does it occur?

.....
.....[2]

(ii) For how many months between October and June is the rainfall above 100 mm?

.....[1]

(iii) Give two causes of high rainfall between October and June at Dir.

.....
.....[2]

(vi) What is the main cause of summer rainfall at Dir?

.....[1]

c) (i) On the outline map of Pakistan mark and shade two areas which experience high annual rainfall (above 500mm).



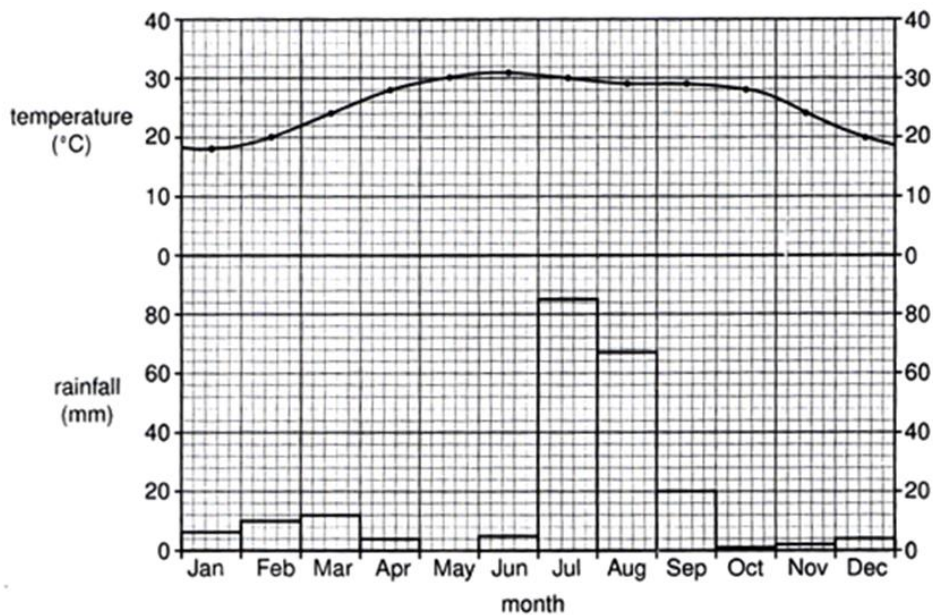
(ii) Mention any two reasons of high rainfall in these areas.

.....
.....
.....
.....[2]

(iii) Explain the difficulties for people living in areas of high rainfall.

.....
.....
.....
.....
.....
.....[3]

Q.3 (a) Study Fig which shows the climate of Karachi.



(i) By how much does the temperature rise from January to May?

.....[1]

(ii) Describe the pattern of rainfall during the winter season from October to March.

.....

[2]

(iii) With reference to Fig. only, describe the climate of the months from June to September.

.....

.....
.....
.....
.....
.....[4]

(b) (i) Explain the causes of the monsoon at Karachi.

.....
.....
.....
.....
.....
.....
.....
.....
.....
.....
.....[4]

(ii) Name the violent storms that form over the sea and that may affect Karachi.

.....[1]

(iii) In which months may these occur?

.....[1]

(c) (i) Explain all the factors effecting the temperature of low land zone.

.....

.....

.....

.....

.....

.....

.....

.....

.....

.....

.....

.....

..... [4]

ii) Explain the term Maritime influence with the help of an example

.....

.....

.....

.....

.....

.....

.....

.....

.....

.....

..... [2]

(d) Evaluate whether it is possible to prevent flood plains being damaged by flood caused by natural factors. Give reasons to support your judgement and refer to examples you have studied. You should consider different points of view in your answer.

.....

.....

.....

.....

.....

.....

.....

.....

.....

.....

.....

