

Adabistan-e-Soophia

General Certificate of Education Ordinary Level 3 (Test 2)

Adabistan-e-Soophia
School for Boys & Girls

CANDIDATE
NAME

--

CENTER NUMBER								CANDIDATE NUMBER						
------------------	--	--	--	--	--	--	--	---------------------	--	--	--	--	--	--

PAKISTAN STUDIES

Paper II

2059/02

Environment of Pakistan

Session

2	0	2	0	-	2	1
---	---	---	---	---	---	---

Time

9	0	m	i	n	u	t	e	s
---	---	---	---	---	---	---	---	---

Marks

7	5
---	---

Additional Materials: *Answer Booklet/Paper*

If you have been given an Answer Booklet, follow the instructions on the front cover of the Booklet. Write your Centre number, candidate number and name on all the work you hand in.

Write in dark blue or black pen.

You may use a soft pencil for any diagrams or rough working.

Do not use staples, paper clips, highlighters, glue or correction fluid.

Answer all questions.

At the end of the examination, fasten all your work securely together.

The number of marks is given in brackets [] at the end of each question or part question.

Turn over

1. (a) (i) Name rivers V, W, X and Y.

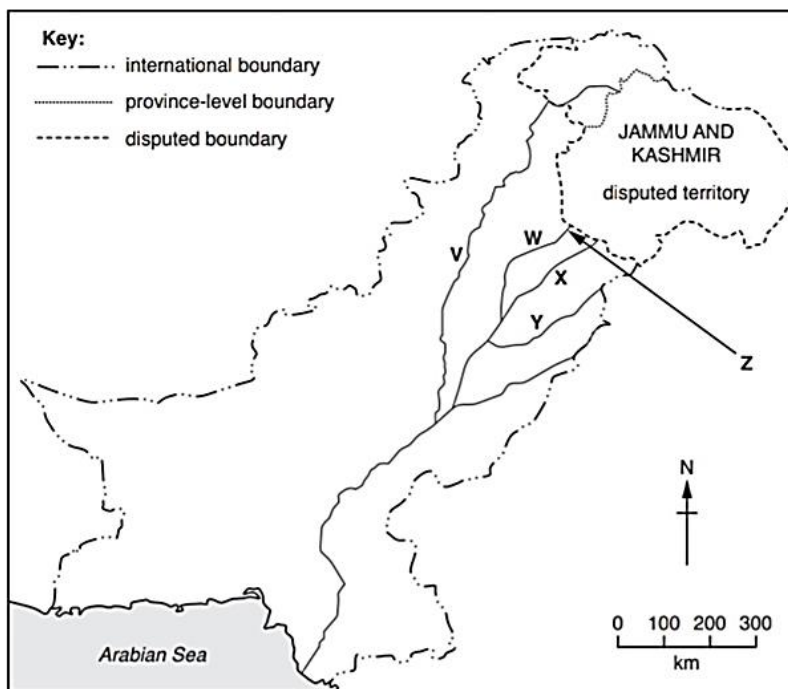


Fig 1.1

- V
- W
- X
- Y [4]

(ii) Name dam Z shown on Fig. 1.1. Z [1]

(b) (i) Name two examples of small dams.

- 1 2 [2]

(ii) State the differences between large and small dams.

.....

.....

.....

.....

.....

.....

.....

.....

.....

..... [4]

(iii) Suggest four problems caused by siltation.

.....
.....
.....
.....
.....
.....
.....
.....
.....
..... [4]

(c) Explain how the mismanagement of water resources is leading to provincial conflicts. You should develop your answer.

.....
.....
.....
.....
.....
.....
.....
.....
..... [4]

(d) Read the following two views about providing solutions to the challenges of water supply in Pakistan:

- A) The best way to conserve and sustain the scarce water resources is maximization of agricultural production with regard to water resource in the provinces**

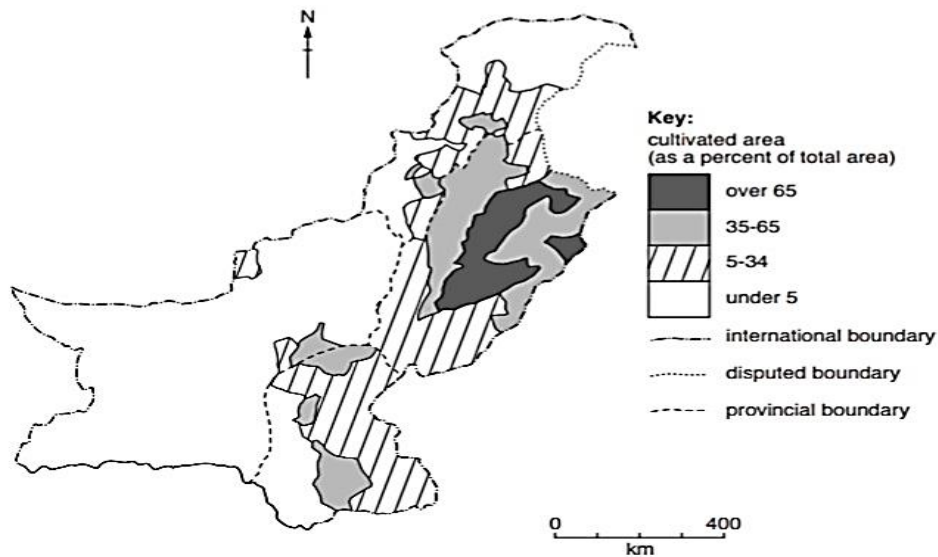
- B) Desalination of sea water, lining of canal and development of dams is the only solution of water scarcity.**

Which view do you agree with more? Give reasons to support your answer and refer to examples you have studied. You should consider View A and View B in your answer.

.....
.....
.....
.....
.....
.....
.....
.....
.....
.....
.....
.....
.....
.....
.....
.....
.....
.....
.....
.....
.....
.....
.....

[6]

2.(a) Study Fig. which gives information about the area of Pakistan under cultivation.



(i) A. Name a district that has a cultivated area less than 65%.

.....

B. How much of Faisalabad District is cultivated?

.....[2]

(ii) Suggest reasons why so many districts of Pakistan have a cultivated area of less than 5%.

.....
.....
.....
.....
.....
.....
.....
.....[3]

(iii) Explain why agricultural land is no longer producing crops in many regions of Pakistan.

.....
.....
.....
.....
.....
.....

.....
.....[4]

(b) (i) identify the livestock shown in the following photograph A and B. [2]



Photograph (A)



Photograph (B)

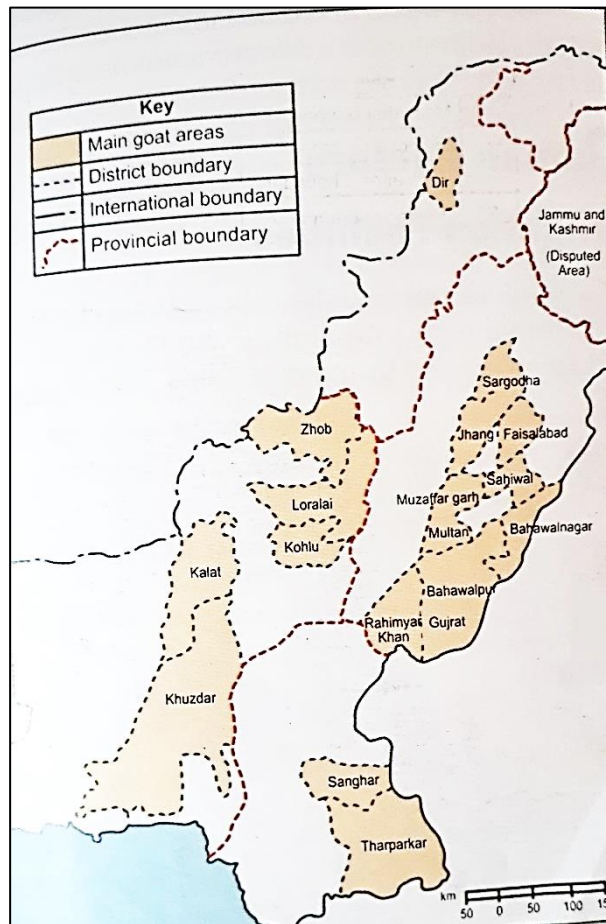
(ii) Name the area where the livestock shown in photograph A is reared and also mention it is used for What?

.....
.....[2]

(iii) Differentiate between Nomadic and transhumance way of keeping livestock.

.....
.....
.....
.....
.....
.....[3]

(c) Describe the distribution of main goat areas in Pakistan.



.....

.....

.....

.....

.....

.....

.....

.....

.....

.....

.....

.....

[3]

3.(a)(i) Name the areas where the following forests are grown

Mangroves _____


Rakh _____

Riverain _____

Irrigated forests _____

[4]

(ii) Describe the appearance of the forest shown in Photograph.



.....
.....
.....
.....
.....
.....
.....
.....[3]

(iii) Explain the importance of the forest for the people living in mountainous area.

.....
.....
.....
.....
.....
.....
.....[3]

Why does the forest in Photograph A appear to be in an area of afforestation?



.....
.....
.....
.....
.....
.....
.....
.....[3]

(b) (i) State two effects of deforestation in mountain areas.

.....
.....
.....
.....[2]

(ii) Explain how one of these could be controlled.

.....
.....
.....
.....

